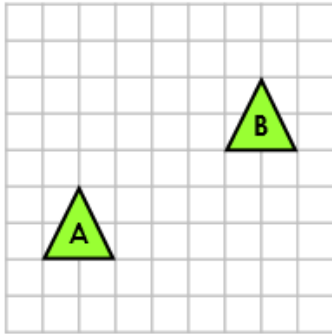


4a. Tick the translation from shape A to shape B.

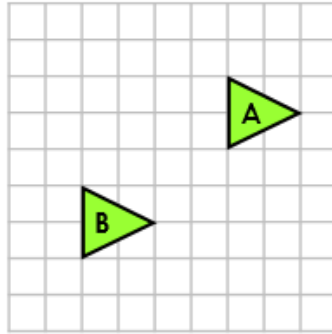


- 5 right, 2 up
- 5 right, 3 up



VF

4b. Tick the translation from shape A to shape B.

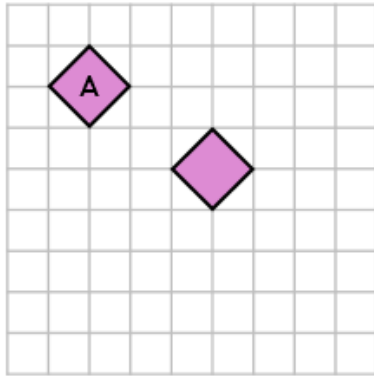


- 4 left, 3 down
- 4 left, 4 down



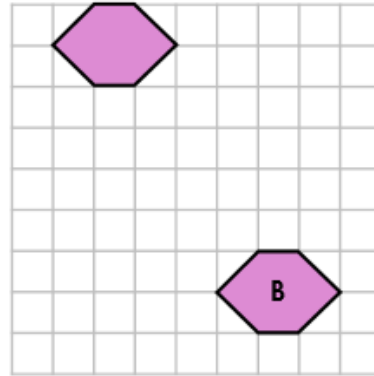
VF

5a. True or false? Shape A has been translated 3 right and 2 down.



VF

5b. True or false? Shape B has been translated 4 left and 5 up.



VF